

## Map Question Bank

Class 12<sup>th</sup>

### History

Remove Watermark Now

1.1 On the given political outline map of india **Locate & Label** the following.

- a. Taxila
- b. Magadha
- c. Avanti

1.2 On the same map three sites of Harappan civilization, where evidence of agriculture has been recovered are marked as 1. , 2. , 3. Identify them and write correct names on the lines drawn near by them.



**2.1** On the given political outline map of India **Locate & Label** the following.

- a. Harappa
- b. Mohenjodaro
- c. Dholavira

**2.2** On the same map three place, where Ashokan pillar inscriptions have been found, are marked as 1. , 2. , 3. Identify them and write correct names on the lines drawn near by them.



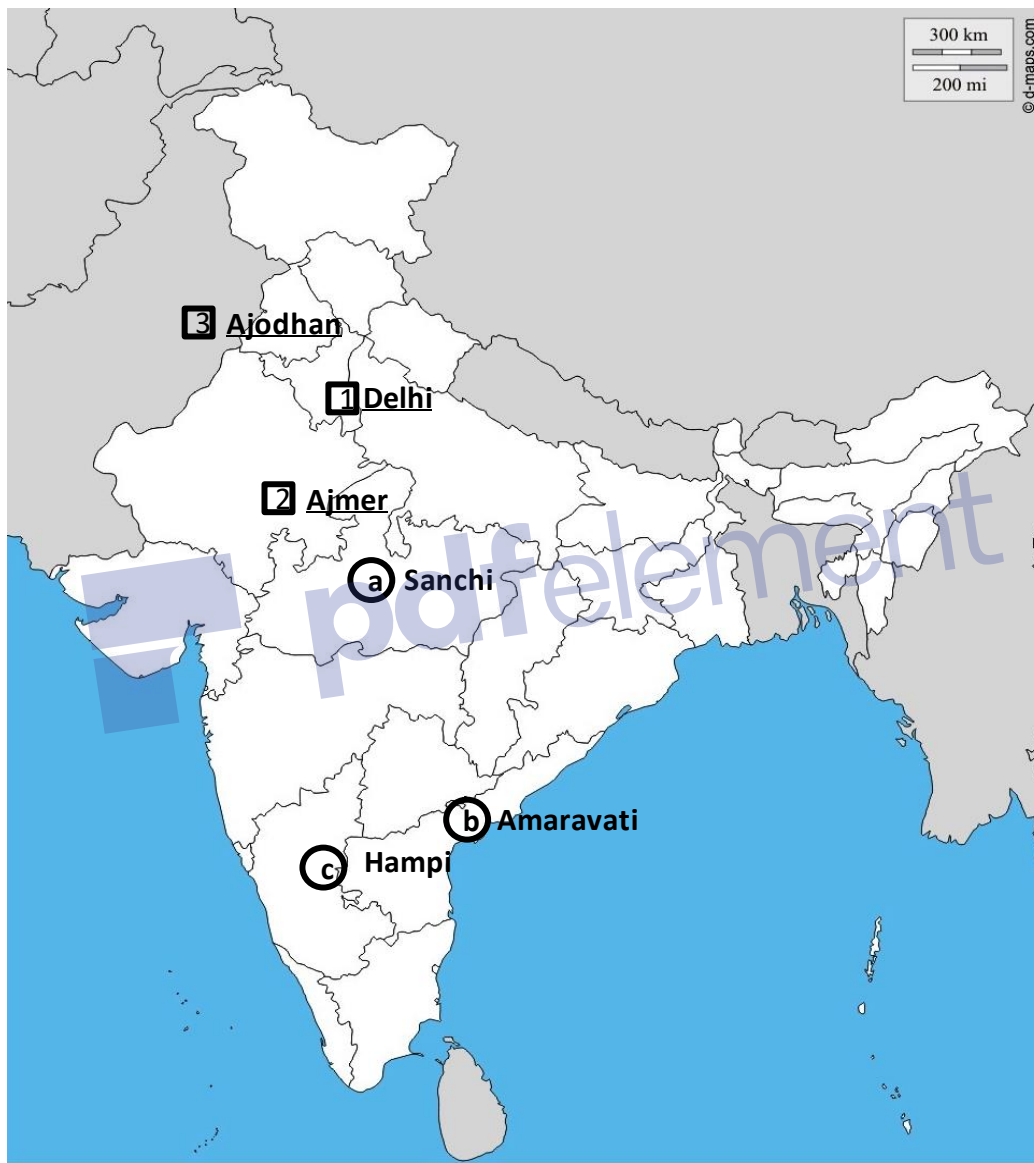
3.1 On the given political outline map of India **Locate & Label** the following.

- a. Sanchi
- b. Amravati
- c. Hampi

3.2 On the same map three place where major sufi shrines (Dargahs) situated, are marked as 1. ,

2. , 3. Identify them and write correct names on the lines drawn near by them.

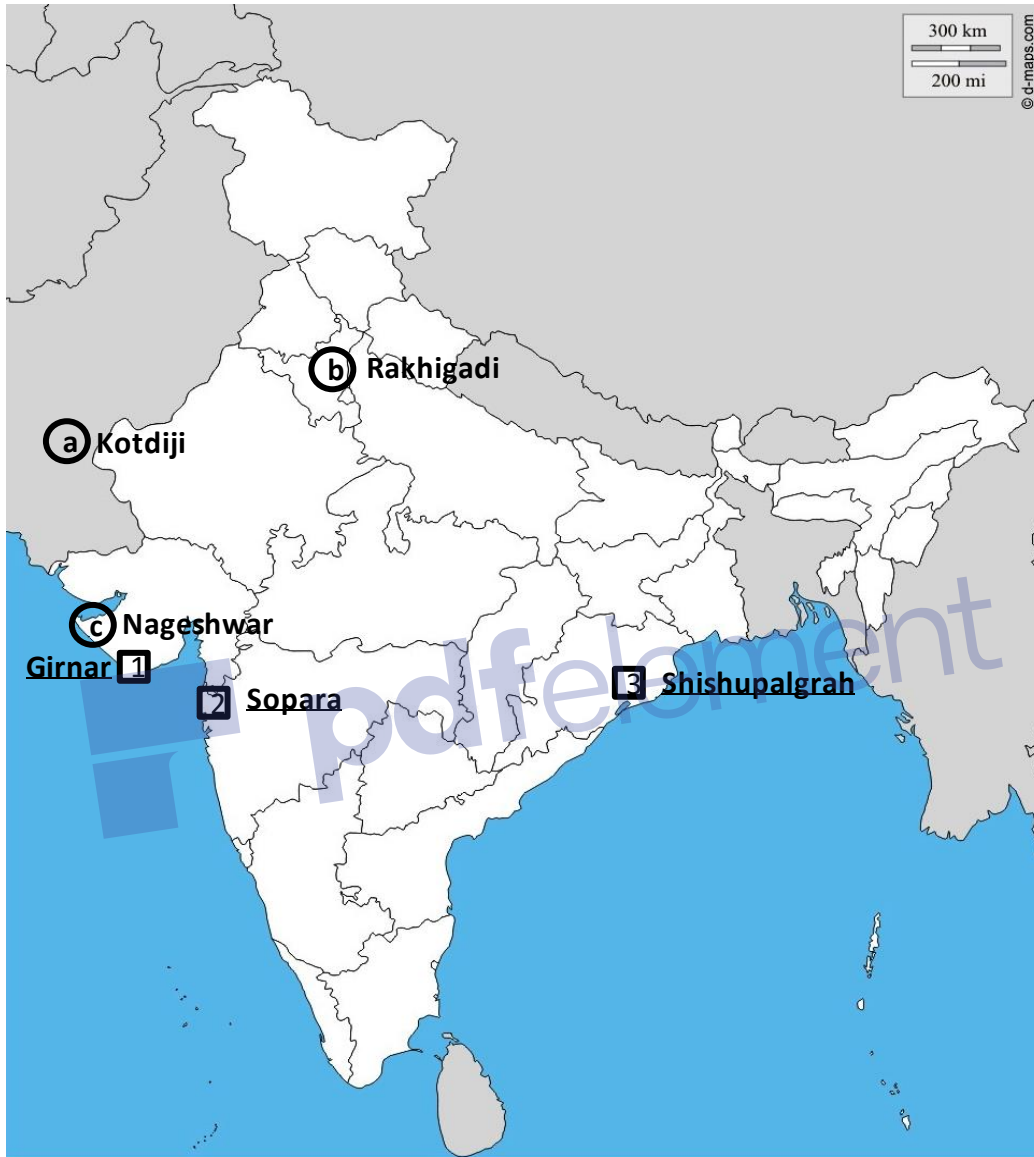
- 1. Dargah of Shaikh Nizamuddin Auliya
- 2. Dargah of Shaikh Muinuddin Chisti
- 3. Dargah of Shaikh Fariduddin Ganj-i-Shakar



4.1 On the given political outline map of india **Locate & Label** the following.

- a. Kotdiji
- b. Rakhigadi
- c. Nageshwar

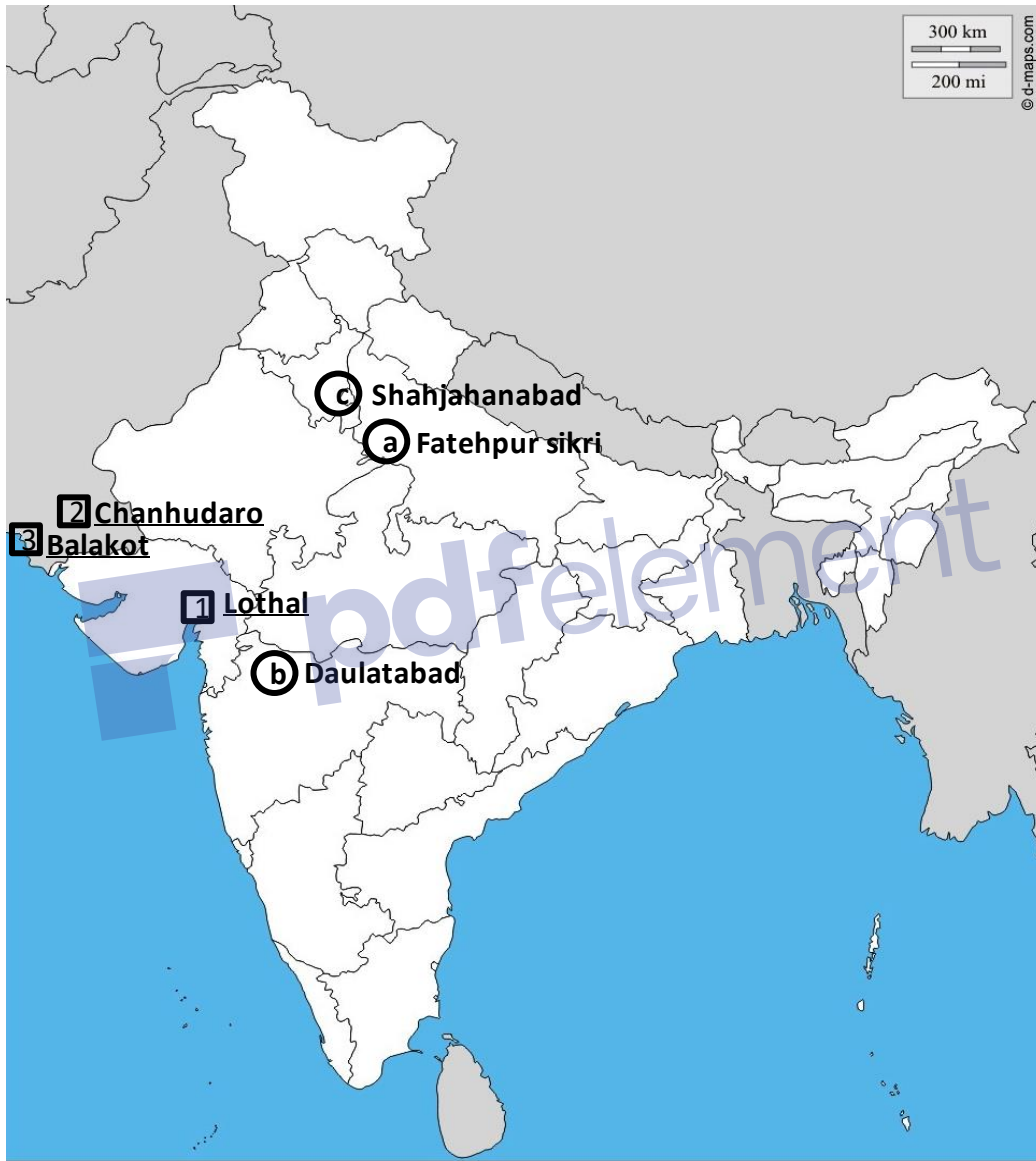
4.2 On the same map three place, where Ashokan rock incriptions have been found, are marked as 1. , 2. , 3. Identify them and write correct names on the lines drawn near by them.



5.1 On the given political outline map of india **Locate & Label** the following.

- a. Fatehpur sikri
- b. Daulatabad
- c. Shahjahanabad

5.2 On the same map three sites of Harappan civilization, where evidence of craft production has been recovered, are marked as 1. , 2. , 3. Identify them and write correct names on the lines drawn near by them.

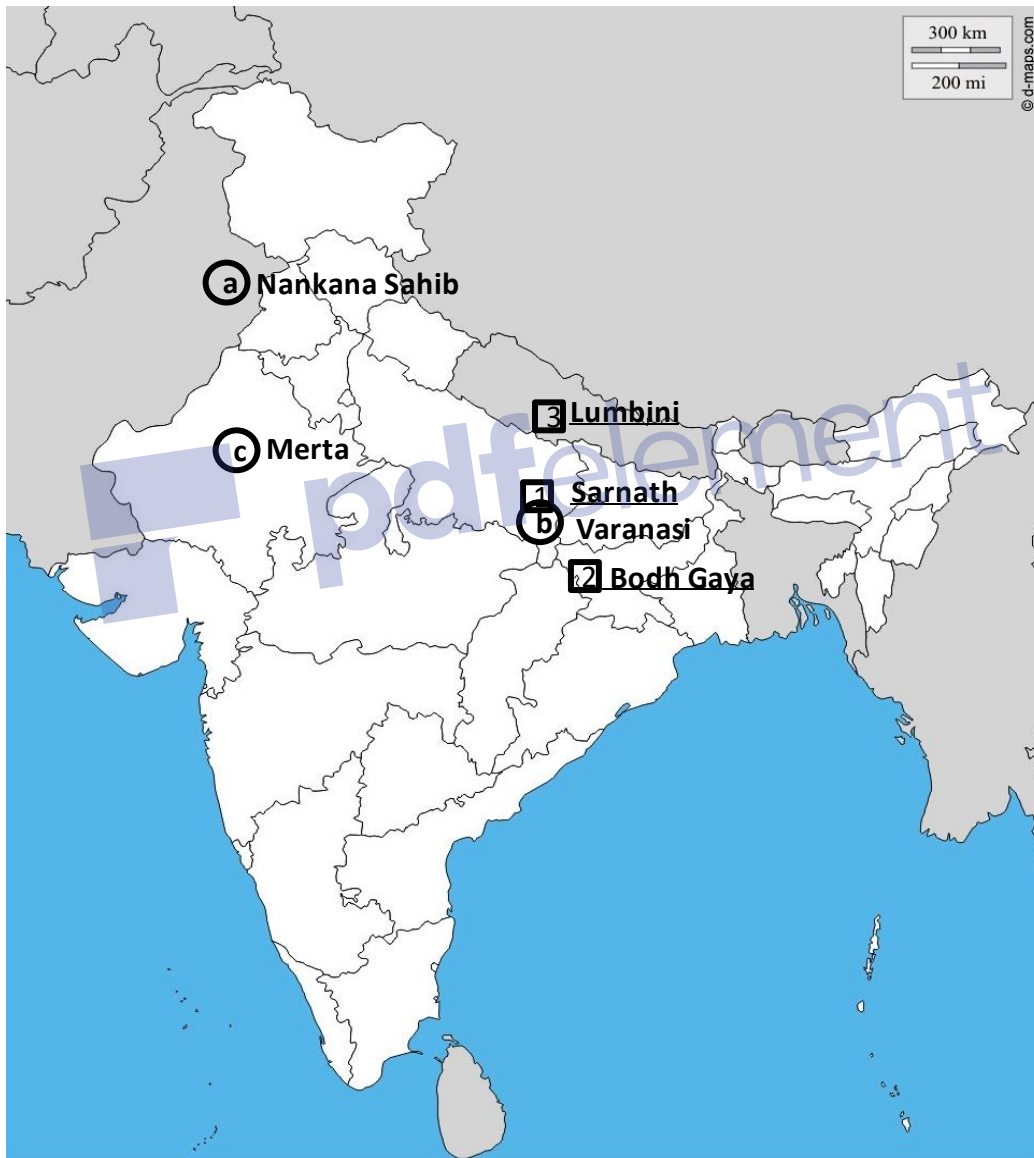


6.1 On the given political outline map of India **Locate & Label** the following.

- a. Nankana Sahib      b. Varanasi      c. Merta

6.2 On the same map three places, related to Buddha, have been marked as 1, 2, 3. Identify them and write correct names on the lines drawn near by them.

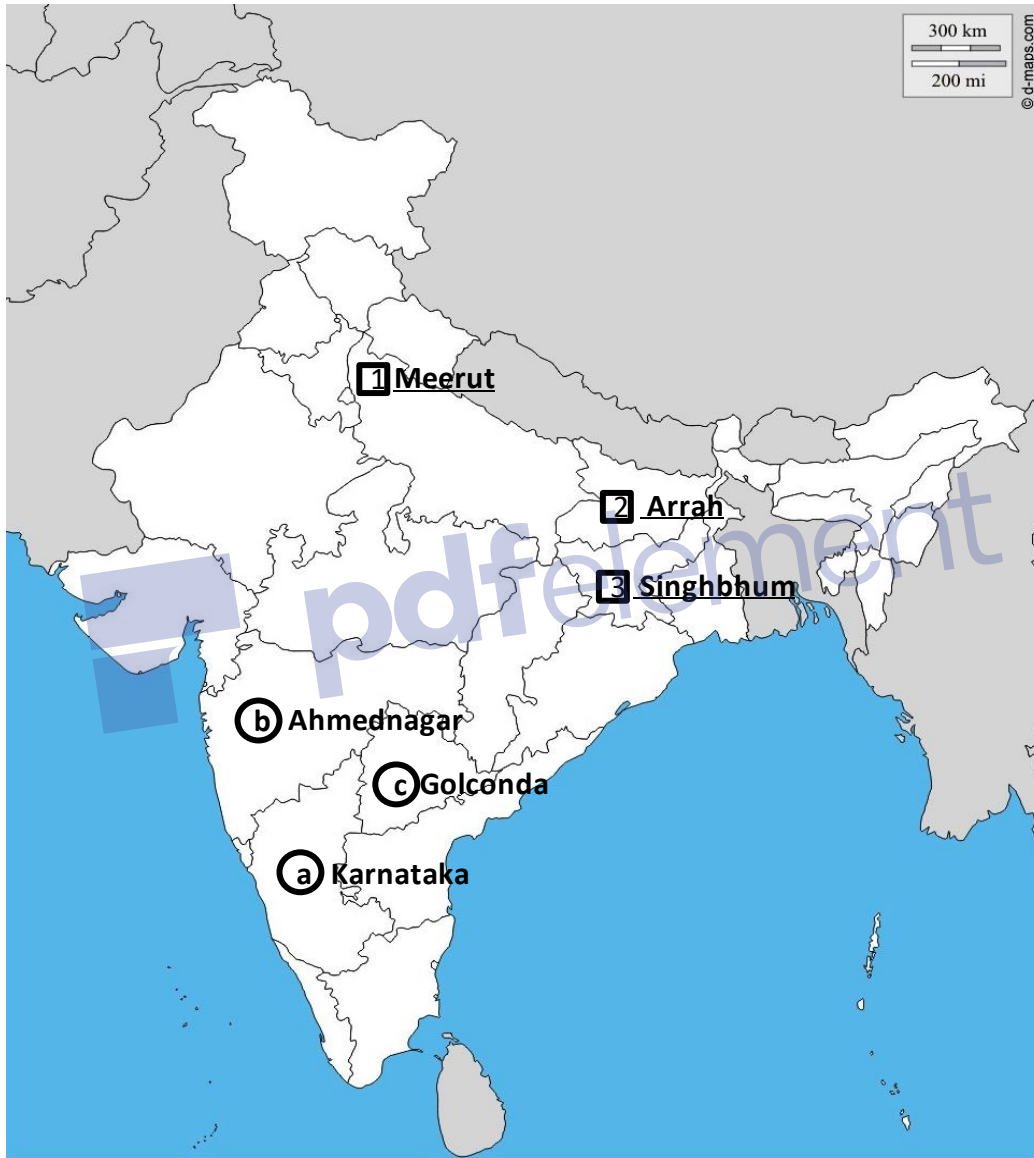
1. The place where Buddha gave his first sermon.
2. The place where Buddha attained enlightenment.
3. The place where Buddha was born.



7.1 On the given political outline map of india **Locate & Label** the following.

- a. The state where the virashaiva movement emerged.
- b. Ahmadnagara
- c. Golconda

7.2 On the same map three place, related to the revolt of 1857, are marked as 1. , 2. , 3. Identify them and write correct names on the lines drawn near by them.



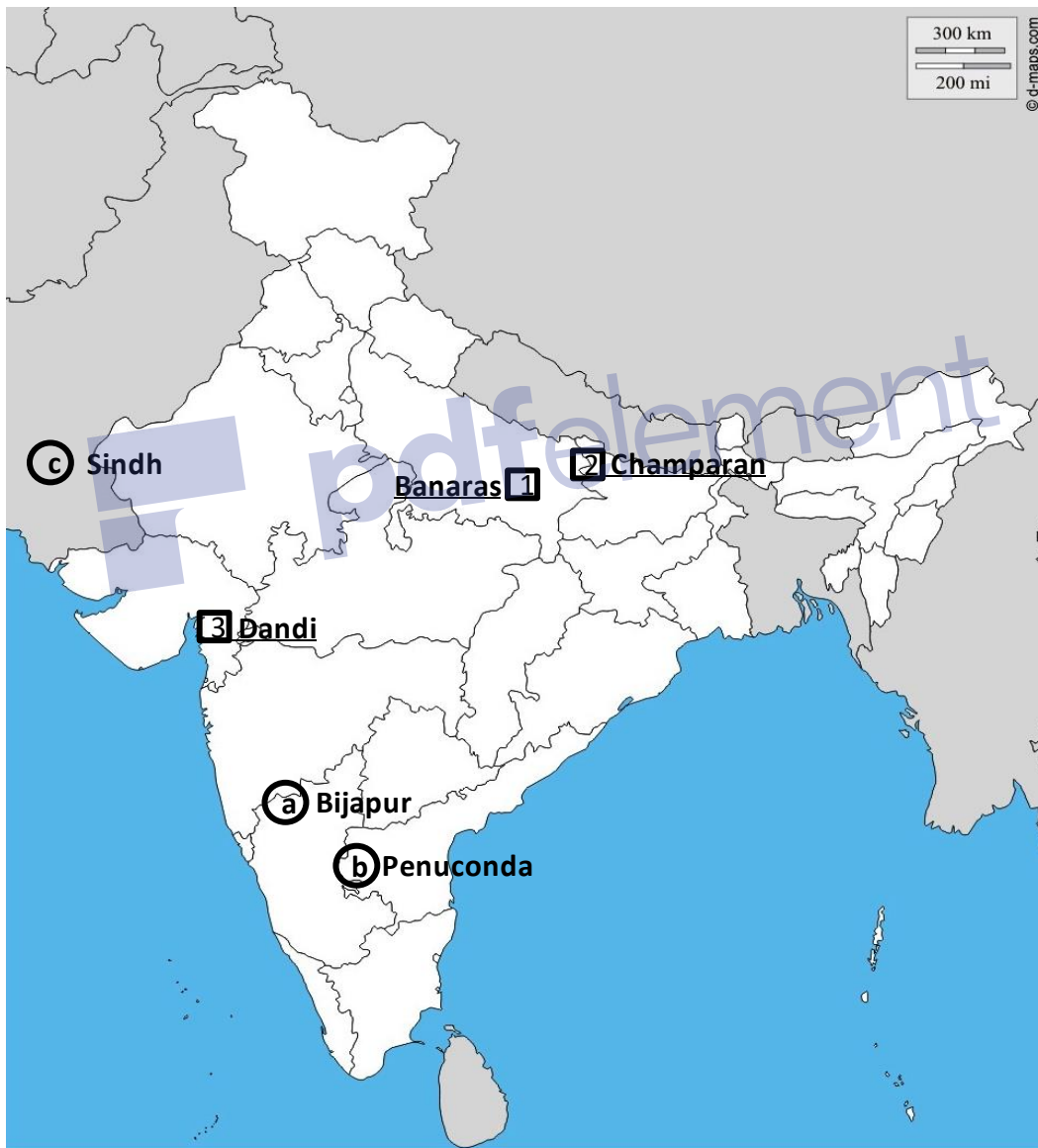
8.1 On the given political outline map of india **Locate & Label** the following.

- Bijapur
- Penuconda
- The place conquered by arab General Muhmmad Qasimin 711

8.2 On the same map three place, related to the Gandhiji 's struggle against british, are marked as

1. , 2. , 3. Identify them and write correct names on the lines drawn near by them.

- The place where Gandhiji Made his first public appearance in 1916.
- The place where Gandhiji organized his first satyagraha.
- The Place where Gandhiji broke the salt tax laws



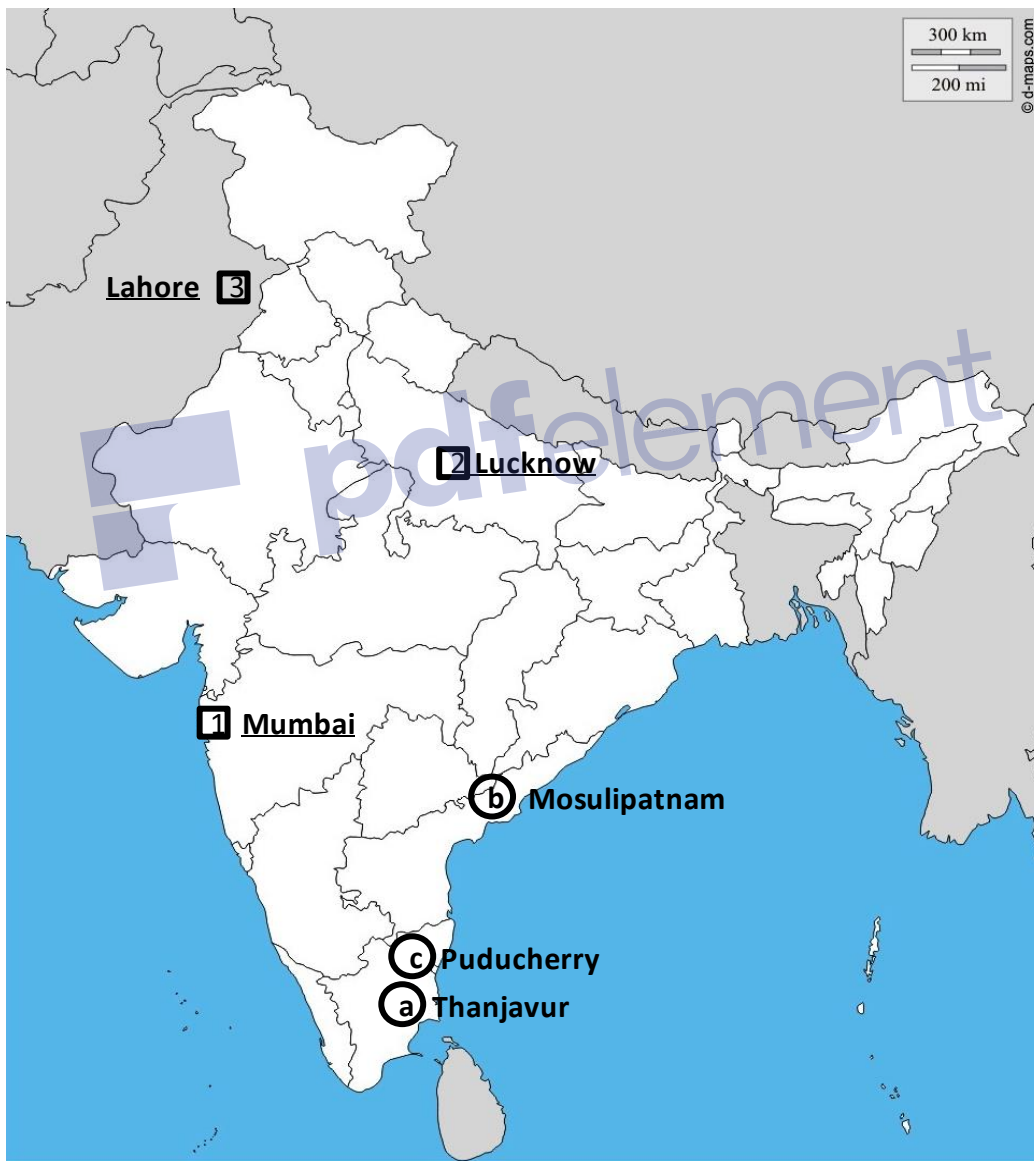


9.1 On the given political outline map of india **Locate & Label** the following.

- a. Thanjavur
- b. Masulipatnam
- c. Puducherry

9.2 On the same map three place, related to the Gandhiji 's struggle against british, are marked as 1. , 2. , 3. Identify them and write correct names on the lines drawn near by them.

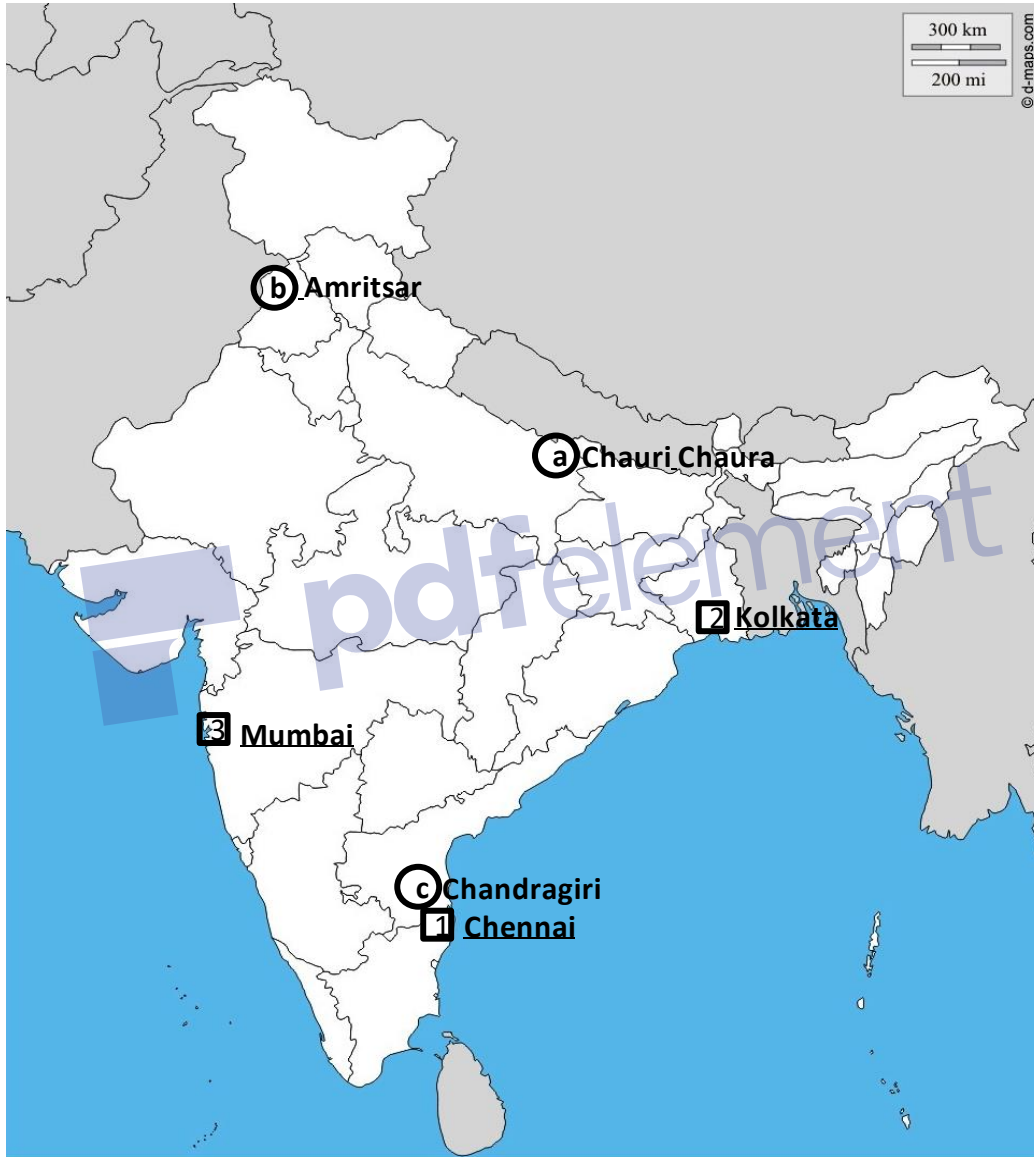
1. The Venue of first annual session of Congress.
2. The Venue of annual sesion of Congress in 1916.
3. The Venue of annual sesion of Congress in 1922.



10.1 On the given political outline map of india **Locate & Label** the following.

- a. Chauri Chaura
- b. Amritsar
- c. Chandragiri

10.2 On the same map three Major Colonial cities, are marked as 1. , 2. , 3. Identify them and write correct names on the lines drawn near by them.

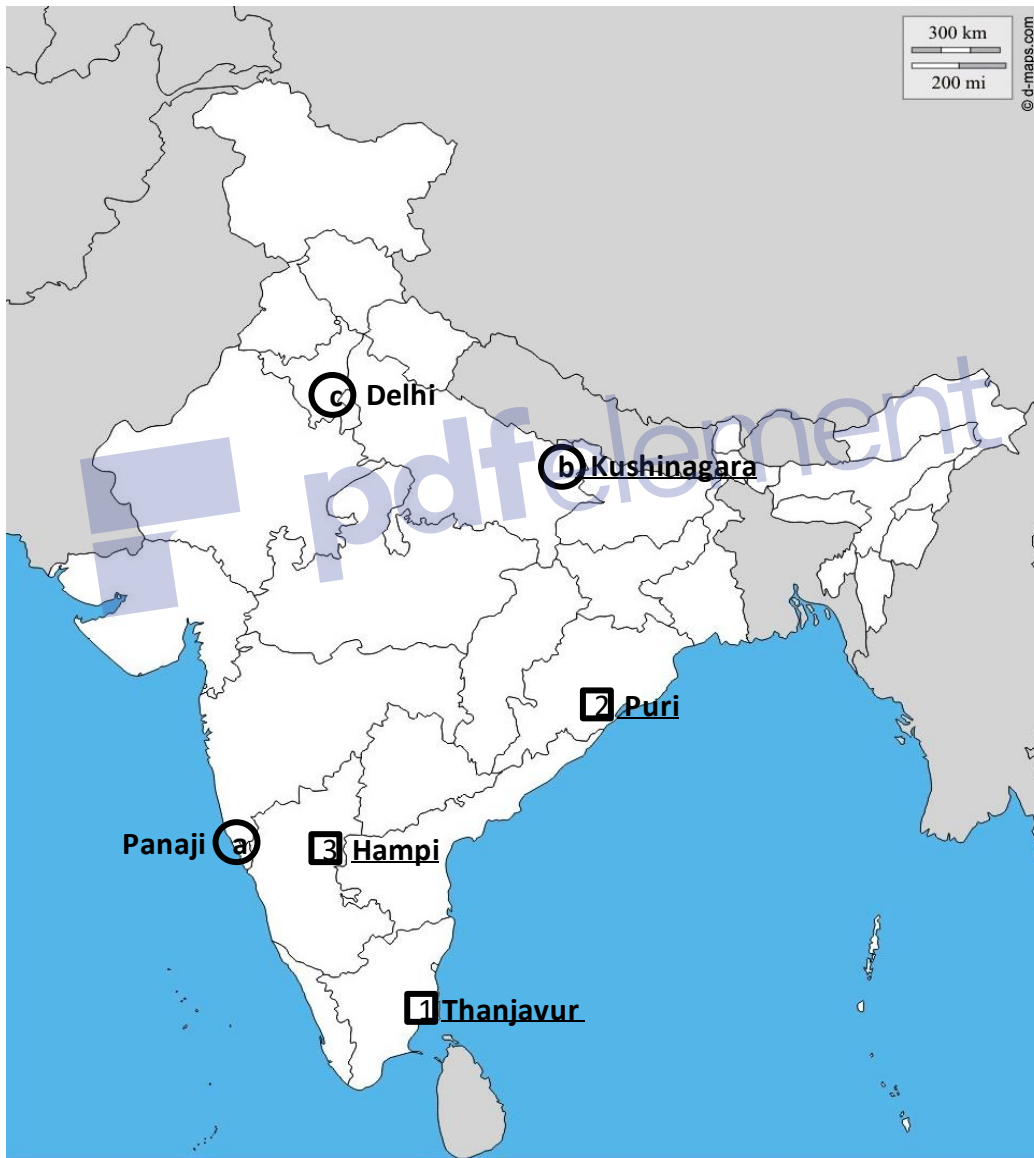


11.1 On the given political outline map of india **Locate & Label** the following.

- Panaji
- Kushinagara
- The place where Bahadurshah led the revolt

11.2 On the same map three place associated with temple marked as 1. , 2. , 3. Identify them and write correct names on the lines drawn near by them.

- Brihadeswara temple
- Jagannatha temple
- Virupaksha temple



12.1 On the given political outline map of world **Locate & Label** the following.

- a. Khwarizm
- b. Tangier
- c. Quanzhou

12.2 On the same map three area, where Buddhism spread, are marked as 1. , 2. , 3. Identify them and write correct names on the lines drawn near by them.

